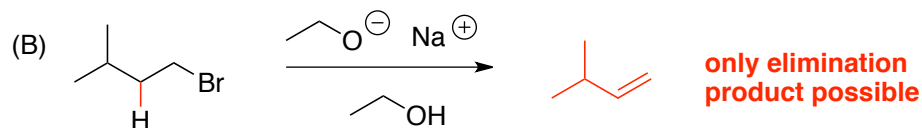
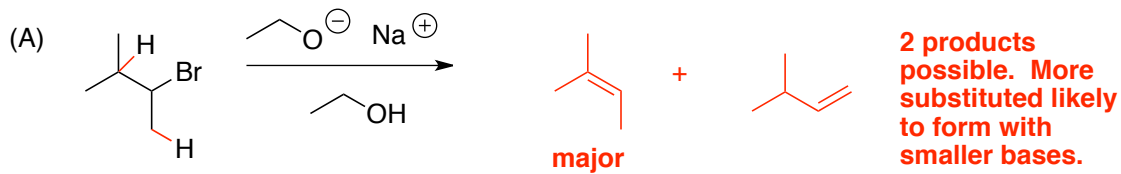


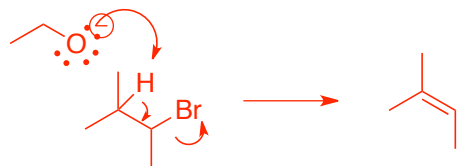
Quiz 2. Wednesday Morning

Name:

1a) Predict the major products of the following 2 elimination reactions.(4 points)

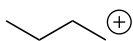
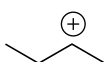


b) Using curved arrows, show a mechanism for (A). (2 points)



**E2 would be a concerted reaction**

2) Which of the following cations is the most stable, which is the least stable, and explain your answers (4 points).



**least stable  
primary cation**

**most stable  
tertiary cation**